





NAME _____

DATE _____

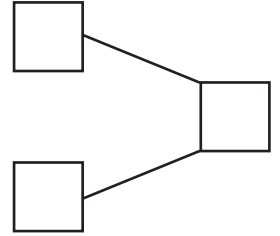
COUNTING OBJECTS BY TENS AND ONES



Count the objects in groups of tens and ones and fill the number bond. Complete the number sentences by adding the tens and ones.

1)  $7 \times 10 = 70$
 $7 \times 1 = 7$

Addition of 70 and 7 make ____.

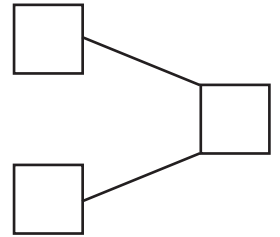
$$70 + 7 = \underline{\quad}$$





2)  $6 \times 10 = 60$
 $4 \times 1 = 4$

Addition of 60 and 4 make ____.

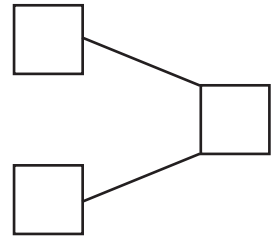
$$60 + 4 = \underline{\quad}$$





3)  $9 \times 10 = 90$
 $5 \times 1 = 5$

Addition of 90 and 5 make ____.

$$90 + 5 = \underline{\quad}$$



4)  $8 \times 10 = 80$
 $6 \times 1 = 6$

Addition of 80 and 6 make ____.

$$80 + 6 = \underline{\quad}$$

